



International Mathematics Competition 2008 (IMC 2008)

World Youth Mathematics Intercity Competition
Team Contest Time limit: 60 minutes 2008/10/28
Chiang Mai, Thailand

Team: _____ *Score:* _____

1. The fraction $\frac{p}{q}$ is in the lowest form. Its decimal expansion has the form $0.abababab\dots$. The digits a and b may be equal, except that not both can be 0. Determine the number of different values of p .



World Youth Mathematics Intercity Competition
Team Contest Time limit: 60 minutes 2008/10/28
Chiang Mai, Thailand

Team: _____ **Score:** _____

2. Cover up as few of the 64 squares in the following 8×8 table as possible so that neither two uncovered numbers in the same row nor in the same column are the same. Two squares sharing a common side cannot both be covered.

6	4	5	7	7	3	3	5
4	8	4	3	6	7	5	1
3	1	5	7	7	7	6	2
7	5	5	8	8	4	2	3
4	5	6	5	8	1	7	3
3	3	3	6	1	8	8	3
1	7	3	2	3	6	4	8
1	6	2	2	4	5	8	7


6	4	5	7	7	3	3	5
4	8	4	3	6	7	5	1
3	1	5	7	7	7	6	2
7	5	5	8	8	4	2	3
4	5	6	5	8	1	7	3
3	3	3	6	1	8	8	3
1	7	3	2	3	6	4	8
1	6	2	2	4	5	8	7

ANSWER :

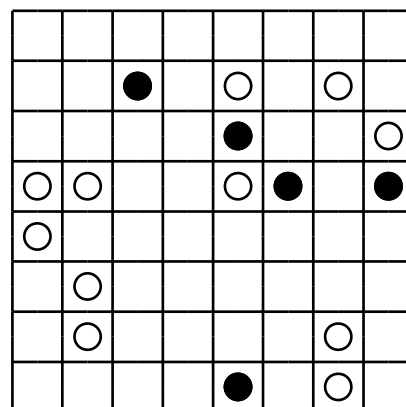
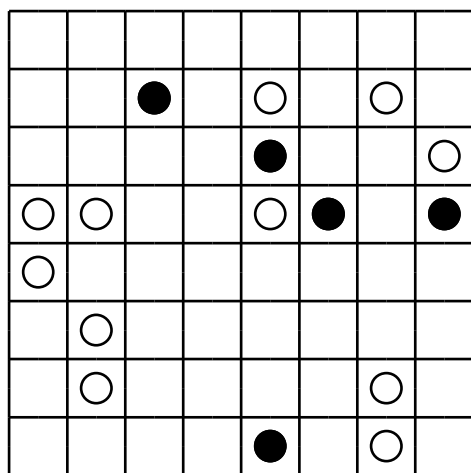
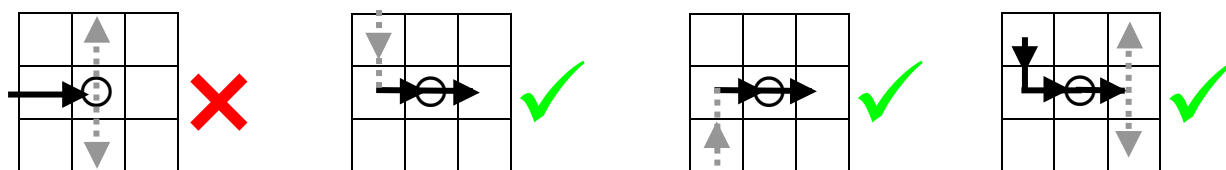


World Youth Mathematics Intercity Competition
Team Contest Time limit: 60 minutes 2008/10/28
ChiangMai, Thailand

3. On the following 8×8 board, draw a single path going between squares with common sides so that
- it is closed and not self-intersecting;
 - it passes through every square with a circle, though not necessarily every square;
 - it turns at every square with a black circle, but does not do so on either the square before or the one after;



- it does not turn at any square with a white circle, but must do so on either the square before or the one after, or both.



World Youth Mathematics Intercity Competition
Team Contest **Time limit: 60 minutes** 2008/10/28
Chiang Mai, Thailand

Team: _____ **Score:** _____

4. Consider all $a \times b \times c$ boxes where a, b and c are integers such that $1 \leq a \leq b \leq c \leq 5$. An $a_1 \times b_1 \times c_1$ box fits inside an $a_2 \times b_2 \times c_2$ box if and only if $a_1 \leq a_2$, $b_1 \leq b_2$ and $c_1 \leq c_2$. Determine the largest number of the boxes under consideration such that none of them fits inside another.

ANSWER: _____



International Mathematics Competition 2008
(IMC 2008)

World Youth Mathematics Intercity Competition
Team Contest **Time limit: 60 minutes** 2008/10/28
Chiang Mai, Thailand

Team: _____ *Score:* _____

5. Initially, the numbers 0, 1 and 4 are on the blackboard. Our task is to add more numbers on the blackboard by using the following procedures: In each step, we select two numbers a and b on the blackboard and add the new number $c = ab + a + b$ on the blackboard. What is the smallest number not less than 2008 which can appear on the blackboard after repeating the same procedure for several times?



International Mathematics Competition 2008
(IMC 2008)

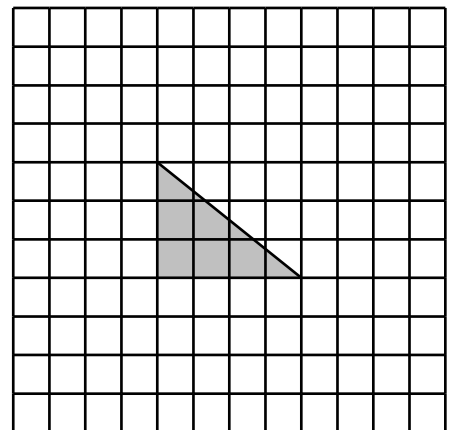
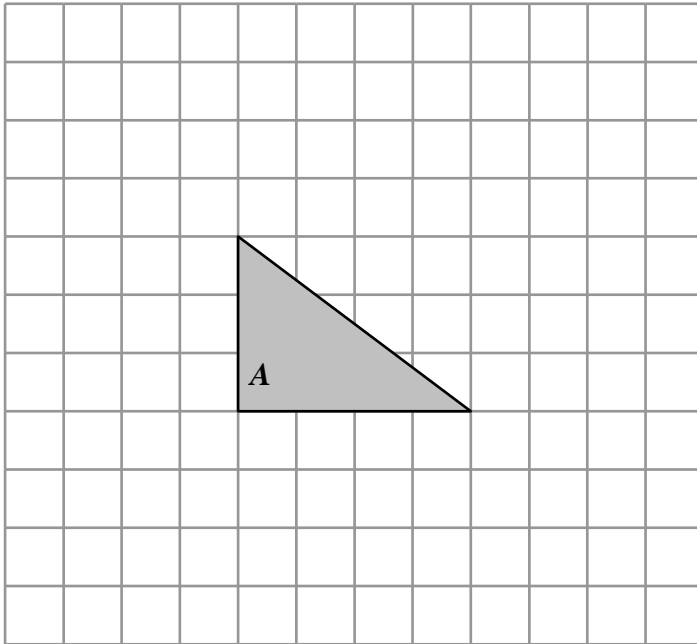
World Youth Mathematics Intercity Competition
Team Contest **Time limit: 60 minutes** 2008/10/28

Chiang Mai, Thailand

Team: _____

Score: _____

6. Given a shaded triangle as below, find all possible ways of extending one of its sides to a new point so that the resulting triangle has two equal sides. Mark the points of extension on the space given below.



International Mathematics Competition 2008
(IMC 2008)

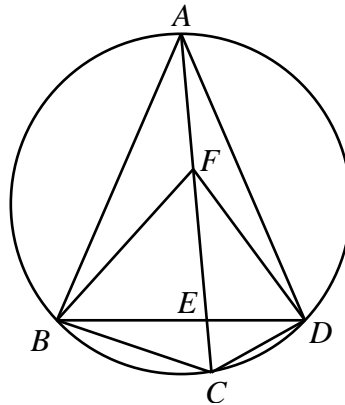
World Youth Mathematics Intercity Competition
Team Contest Time limit: 60 minutes 2008/10/28

Chiang Mai, Thailand

Team: _____

Score: _____

7. $ABCD$ is a quadrilateral inscribed in a circle, with $AB=AD$. The diagonals intersect at E . F is a point on AC such that $\angle BFC = \angle BAD$. If $\angle BAD = 2\angle DFC$, determine $\frac{BE}{DE}$.



International Mathematics Competition 2008
(IMC 2008)

World Youth Mathematics Intercity Competition
Team Contest Time limit: 60 minutes 2008/10/28
Chiang Mai, Thailand

Team: _____

Score: _____

8. How many five-digit numbers are there that contain the digit 3 at least once?

ANSWER : _____



International Mathematics Competition 2008
(IMC 2008)

World Youth Mathematics Intercity Competition
Team Contest Time limit: 60 minutes 2008/10/28
Chiang Mai, Thailand

Team: _____

Score: _____

9. Among nine identically looking coins, one of them weighs a grams, seven of them b grams each and the last one c grams, where $a < b < c$. We wish to determine whether $a+c < 2b$, $a+c = 2b$ or $a+c > 2b$ using only an unmarked beam balance four times.

ANSWER: _____



International Mathematics Competition 2008
(IMC 2008)

World Youth Mathematics Intercity Competition
Team Contest Time limit: 60 minutes 2008/10/28
Chiang Mai, Thailand

Team: _____

Score: _____

10. Determine the sum of all positive integers n such that

$$1 + n + \frac{n(n-1)}{2} + \frac{n(n-1)(n-2)}{6} = 2^k \quad \text{for some positive integer } k.$$

ANSWER : _____



International Mathematics Competition 2008
(IMC 2008)

World Youth Mathematics Intercity Competition
Team Contest Time limit: 60 minutes 2008/10/28
Chiang Mai, Thailand

Team: _____

Score: _____

ANSWER : _____